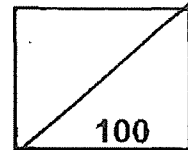


**Rosyth School**  
**End-of-Year Examination 2023**  
**Mathematics**  
**Primary 4**

Name : \_\_\_\_\_ ( )

Total



Class : Pr 4 -

Duration: 1 h 45 min

Date : 24 October 2023

Parent's Signature: \_\_\_\_\_

**Instructions to Pupils:**

1. Do not turn over this page until you are told to do so.
2. Follow all instructions carefully.
3. Answer all questions.
4. This paper consists of 3 parts: Sections A, B and C.
5. For questions 1 to 15 in Section A, shade your answers in the Optical Answer Sheet (OAS).

	Maximum Marks	Marks Obtained
Section A	30	
Section B	42	
Section C	28	
Total	100	

\* This paper consists of 26 printed pages altogether (including this cover page).

This paper is not to be reproduced in part or whole without the permission of the Principal.



**Section A (30 marks)**


Questions 1 to 15 carry 2 marks each. For questions 1 to 15, four options are given. One of them is the correct answer. Make your choice (1, 2, 3 or 4). Shade the correct ovals (1, 2, 3 or 4) onto the Optical Answer Sheet provided.

***All diagrams in this paper are not drawn to scale unless stated otherwise.***

---

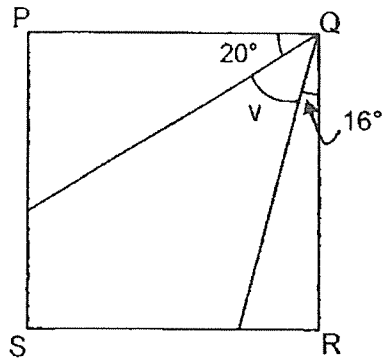
1. Forty-six thousand and sixteen in figures is \_\_\_\_\_.
- (1) 46 160
  - (2) 46 106
  - (3) 46 016
  - (4) 4616
2. In which of the following numbers does the digit 8 stands for 80?
- (1) 3028
  - (2) 3082
  - (3) 3820
  - (4) 8032
3. 13 429 rounded to the nearest hundred is \_\_\_\_\_.
- (1) 13 500
  - (2) 13 430
  - (3) 13 400
  - (4) 13 000

4. The figure shown is made up of identical triangles. What fraction of the figure is shaded?




- (1)  $\frac{4}{12}$
- (2)  $\frac{8}{12}$
- (3)  $\frac{4}{11}$
- (4)  $\frac{4}{8}$
5.  $\frac{1}{3} + \frac{1}{9} = \underline{\hspace{2cm}}$
- (1)  $\frac{1}{27}$
- (2)  $\frac{2}{12}$
- (3)  $\frac{3}{9}$
- (4)  $\frac{4}{9}$

6. In the figure shown, PQRS is a square. Find  $\angle v$ .



- (1)  $36^\circ$
  - (2)  $54^\circ$
  - (3)  $70^\circ$
  - (4)  $74^\circ$
7. What is the number when 17.54 is rounded to 1 decimal place?
- (1) 17.0
  - (2) 17.5
  - (3) 17.6
  - (4) 18.0
8. Abby started cleaning her room at 13 30. She took 1 h 30 min to clean her room. What time did she finish cleaning her room?
- (1) 12 00
  - (2) 12 30
  - (3) 14 30
  - (4) 15 00

9. Which of the following figures in the square grid below has both parallel lines and perpendicular lines?



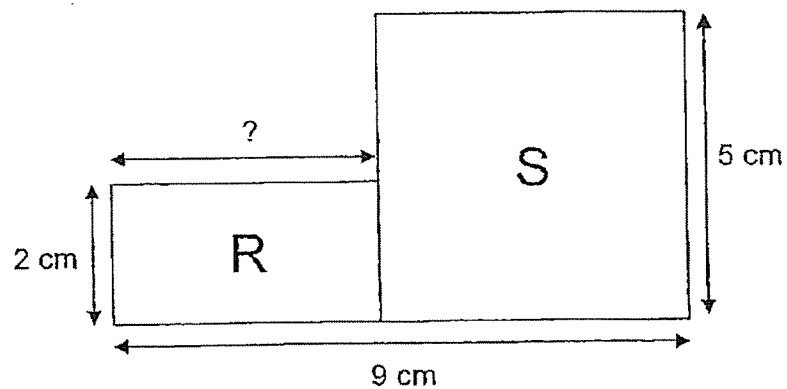
(1)

(2)

(3)




(4)

10. The figure shown is made up of a square S of side 5 cm and a rectangle R with breadth 2 cm. What is the length of rectangle R?



- (1) 7 cm  
 (2) 9 cm  
 (3) 3 cm  
 (4) 4 cm

11. Which of the following does **not** have a line of symmetry?

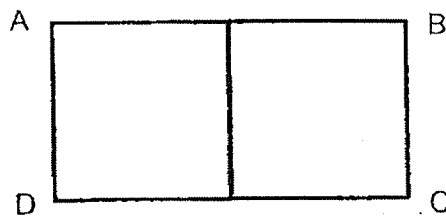


12. The following table shows the number of students who visited the Makerspace from Monday to Friday.

Day	Mon	Tue	Wed	Thu	Fri
Number of students	13	23	26	19	28

What is the total number of students who visited the Makerspace from Monday to Wednesday?

- (1) 39  
(2) 62  
(3) 81  
(4) 109
13. The following rectangle ABCD is made up of 2 squares. The perimeter of a square is 80 cm. Find the perimeter of rectangle ABCD.

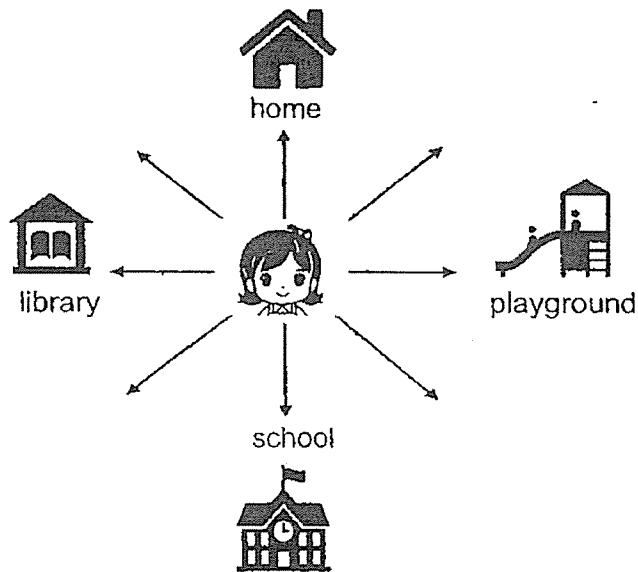


- (1) 20 cm  
(2) 40 cm  
(3) 120 cm  
(4) 160 cm

14. Jason spent \$55 on 2 identical shirts and a pair of pants. A pair of pants cost \$25 more than a shirt. How much did he spend on 1 shirt?

- (1) \$10
- (2) \$15
- (3) \$30
- (4) \$80

15. Alicia is facing her school. She makes a  $\frac{1}{2}$  turn anticlockwise. She then makes a  $270^\circ$  turn clockwise. Where is she facing now?



- (1) home
- (2) library
- (3) playground
- (4) school

**Section B (42 marks)**

Questions 16 to 36 carry 2 marks each. Show your working clearly in the space provided for each question and write your answers in the spaces provided. For questions which require units, give your answers in the units stated.

Do not write in this space

*All diagrams in this paper are not drawn to scale unless stated otherwise.*

16.  $83\,905 = 80\,000 + 3000 + \underline{\quad?} + 5$

What is the missing number?

Ans: \_\_\_\_\_

17. Write the missing number in the number pattern below.

13 000 , 12 600 , 12 200 , 11 800 , \_\_\_\_\_ , 11 000

Ans: \_\_\_\_\_

18. Express  $\frac{10}{15}$  in its simplest form.

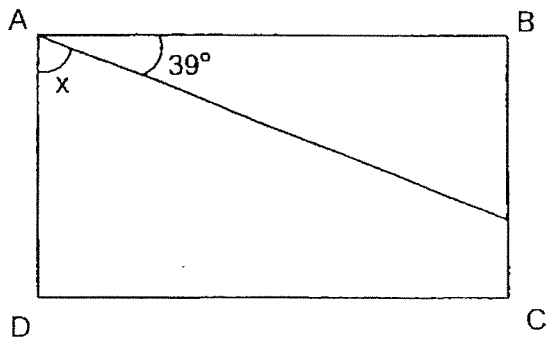
Ans: \_\_\_\_\_

19. Write  $\frac{15}{7}$  as a mixed number.

Do not  
write in  
this space

Ans: \_\_\_\_\_

20. In the figure, ABCD is a rectangle. Find the value of  $\angle x$ .



Ans: \_\_\_\_\_<sup>o</sup>

21. Write 5 thousandths as a decimal.

Ans: \_\_\_\_\_

22. Write  $\frac{85}{100}$  as a decimal.

Do not  
write in  
this space

Ans: \_\_\_\_\_

23. Arrange the following numbers in order from the greatest to the smallest.

3.909, 3.093, 3.099

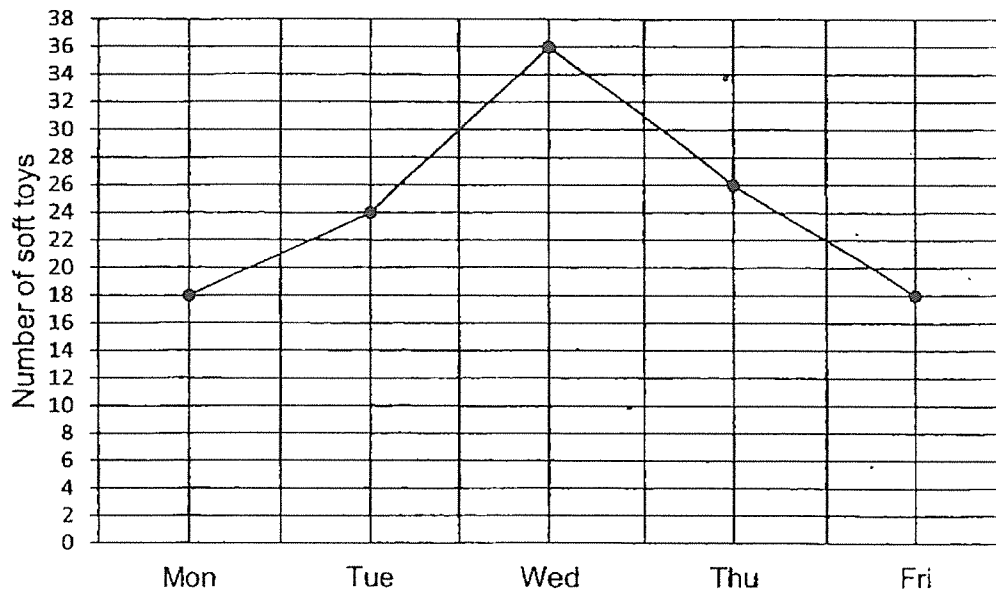
Ans: \_\_\_\_\_ , \_\_\_\_\_ , \_\_\_\_\_  
(greatest) (smallest)

24. Express 0.4 as a fraction.

Ans: \_\_\_\_\_

25. The following line graph shows the number of soft toys sold at the Care Carnival.

Do not  
write in  
this space



Each soft toy was sold at \$12.

- (a) Which day has the greatest number of soft toys sold?

Ans: (a) \_\_\_\_\_

- (b) How much money was collected from the sales on that day?

Ans: (b) \$ \_\_\_\_\_

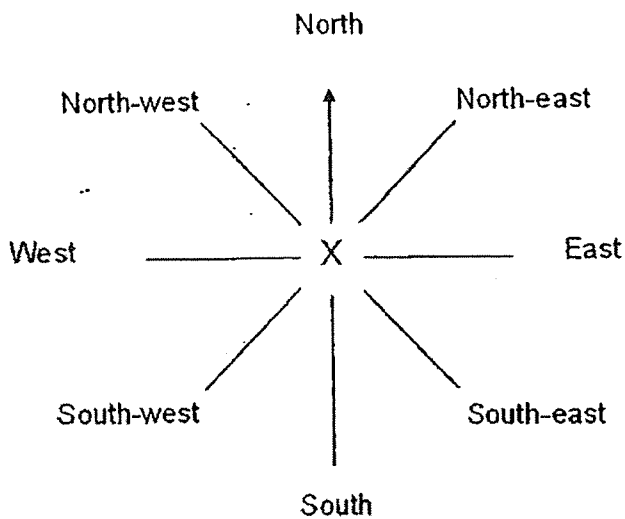


26. Mrs Wong wants to pack 36 blueberry cupcakes and 54 chocolate cupcakes into boxes with no remainder. The total number of cupcakes packed into each box is the same. The number of blueberry cupcakes in each box is the same. What is the greatest number of boxes that Mrs Wong can pack?

Do not write in this space

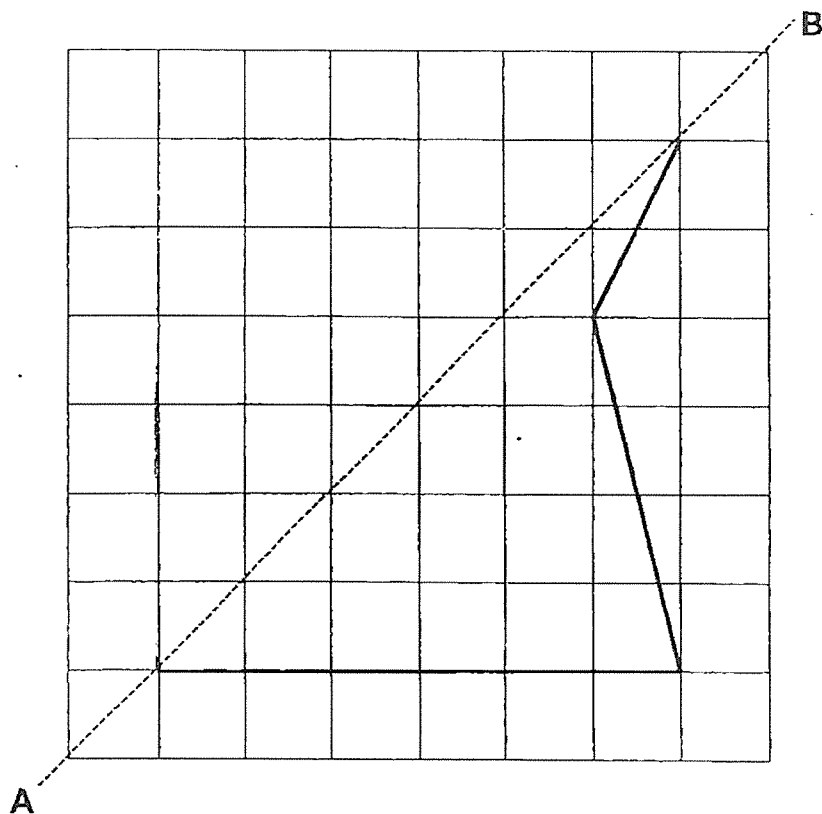
Ans: \_\_\_\_\_

27. Emily and Guo Chuan are standing at point X facing the same direction. After Emily makes a  $270^\circ$  turn clockwise, she faces south-east. Where will Guo Chuan face after he makes a  $135^\circ$  anticlockwise turn from the original position?




Ans: \_\_\_\_\_

28. Complete the following symmetric figure with line AB as the line of symmetry.

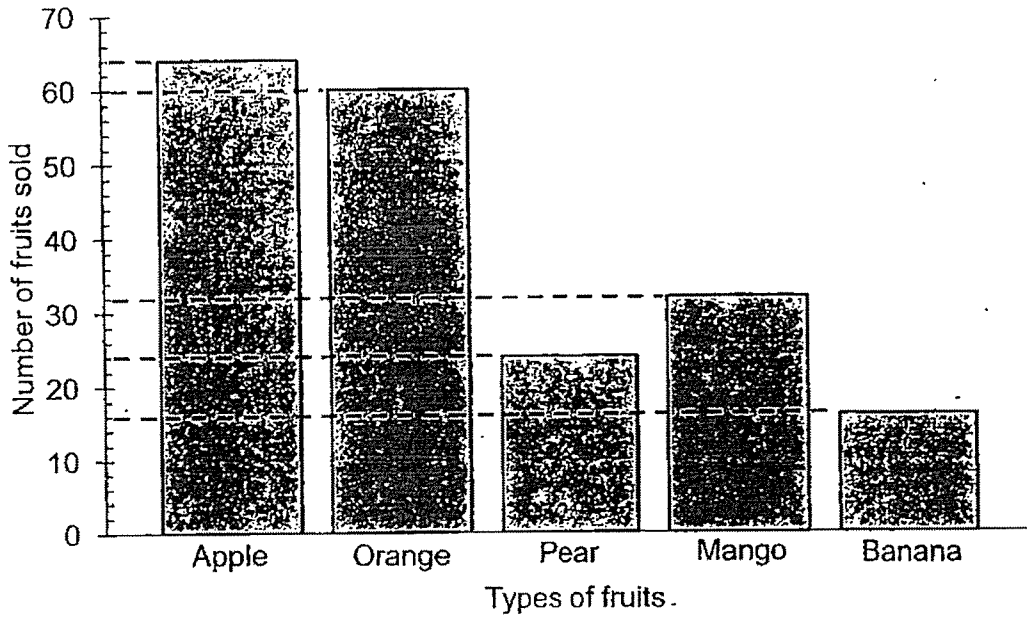


Do not  
write in  
this space



29. The graph below shows the number of fruits sold in the first week of August.

Do not write in this space




Which fruit was sold twice as many as mangoes?

Ans: \_\_\_\_\_

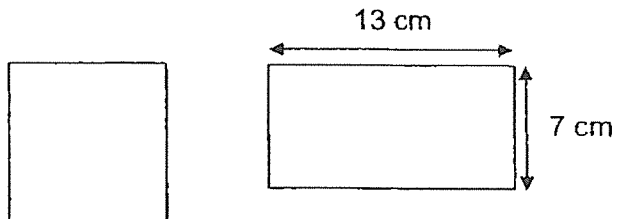
30. The figure is made up of 2 identical rectangles. The total area of the figure is  $48 \text{ cm}^2$ . Find the length of one rectangle.

Do not write in this space



Ans: \_\_\_\_\_ cm

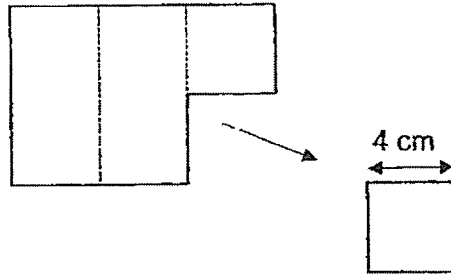
31. The following square and rectangle have the same perimeter. Find the area of the square.



Ans: \_\_\_\_\_  $\text{cm}^2$

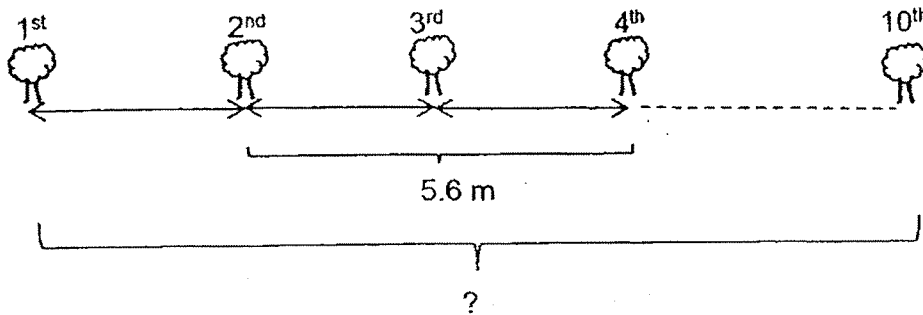
32. A square of side 4 cm has been cut out from a rectangular piece of paper as shown below. Exactly 6 such squares can be cut out from the paper without any leftover. Find the perimeter of the piece of paper now.

Do not write in this space



Ans: \_\_\_\_\_ cm

33. 10 trees were planted along a road at equal distance. The distance between the 2<sup>nd</sup> and the 4<sup>th</sup> tree was 5.6 m. What was the distance between the 1<sup>st</sup> and the 10<sup>th</sup> tree?



Ans: \_\_\_\_\_ m

34. Aini prepared 6 ℓ of fruit punch for a party. She poured them equally into 4 bottles. What is the volume of the fruit punch in each bottle?

Do not  
write in  
this space

Ans: \_\_\_\_\_ ℓ

35. Kelvin is 1.81 m tall. He is 0.35 m taller than Jonathan. Jonathan is 0.29 m shorter than Elson. What is Elson's height?

Ans: \_\_\_\_\_ m

36. Leela's watch is 15 minutes slower. The time shown on her watch is 1.35 p.m. Find the actual time using the 24-hour clock.

Do not  
write in  
this space

Ans: \_\_\_\_\_

**Section C (28 marks)**

Questions 37 to 40 carry 3 marks each. Questions 41 to 44 carry 4 marks each. Show your working clearly and write your answers in the spaces provided. The number of marks available is shown in brackets [ ] at the end of each question or part-question.

Do not  
write in  
this space

- 
37. When I open my storybook, two pages face me. The sum of these two page numbers is 667. What is the page number of the smaller number?

Ans. \_\_\_\_\_ [3]

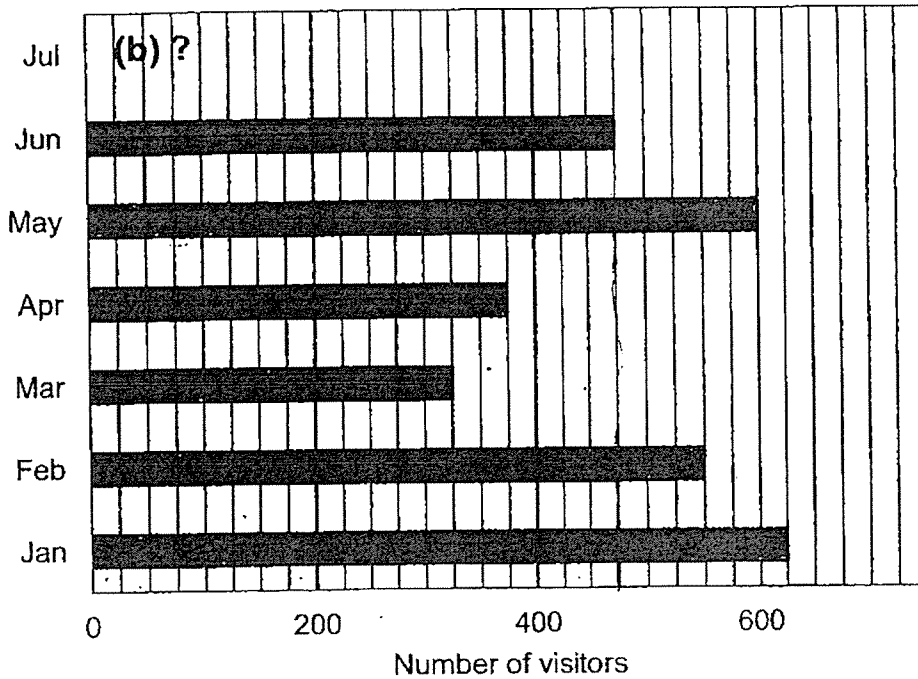
- 
38. Mark bought some sweets. He gave his friends  $\frac{1}{7}$  of the sweets and gave his brother  $\frac{3}{4}$  of the sweets. All the remaining sweets were eaten by him.

What fraction of the sweets did Mark eat?

Ans: \_\_\_\_\_ [3]

39. The following graph shows the number of visitors who went to the museum over seven months.

Do not write in this space



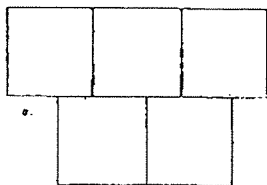
- (a) Between January to June, which month has the least number of visitors?

Ans: (a) \_\_\_\_\_ [1]

- (b) The total number of visitors who went to the museum in May, June and July is 1500. How many visitors went to the museum in July?

Ans: (b) \_\_\_\_\_ [2]

40. The figure below is made up of 5 identical squares.



The area of a square is  $25 \text{ cm}^2$ . What is the perimeter of the figure above?

Do not  
write in  
this space

Ans: \_\_\_\_\_ [3]



41. Nicole had baked five times as many cookies as Joey at first. After Nicole gave away 235 cookies and Joey gave away 19 cookies, they had the same number of cookies left.

Do not  
write in  
this space

(a) How many cookies did Nicole bake at first?

Ans: (a) \_\_\_\_\_ [2]

(b) How many cookies did each of them have in the end?

Ans: (b) \_\_\_\_\_ [2]

42. Mrs Devi and Mdm Tan baked an equal number of muffins for sale. Mrs Devi sold 49 muffins and had  $\frac{2}{9}$  of the muffins left.

Do not  
write in  
this space

(a) How many muffins did Mrs Devi have left?

Ans: (a) \_\_\_\_\_ [2]

(b) How many muffins did Mrs Devi and Mdm Tan bake in all?

Ans: (b) \_\_\_\_\_ [2]

43. Charlie had twice as marbles as Sally. After Sally lost 45 marbles, Charlie had 5 times as many marbles as Sally. How many marbles did Charlie have?

Do not  
write in  
this space

Ans: \_\_\_\_\_ [4]

44. Three children shared some money. Alice and Benny received \$100 altogether. Benny and Catherine received \$450 in all. Catherine received five times as much money as Alice. How much money did Alice receive?

Do not  
write in  
this space

Ans: \_\_\_\_\_ [4]

---

End of Paper

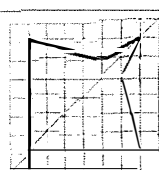


**SCHOOL : ROSYTH SCHOOL**  
**LEVEL : PRIMARY 4**  
**SUBJECT : MATHEMATICS**  
**TERM : 2023 SA2**

**BOOKLET A**

Q1	3	Q2	2	Q3	3	Q4	1	Q5	4
Q6	2	Q7	2	Q8	4	Q9	1	Q10	4
Q11	1	Q12	2	Q13	3	Q14	1	Q15	2

**BOOKLET B**

Q16	900
Q17	11400
Q18	$\frac{2}{3}$
Q19	$2\frac{1}{7}$
Q20	51°
Q21	0.005
Q22	0.85
Q23	3.909, 3.099, 3.093
Q24	$\frac{4}{10}$
Q25a	Wed
Q25b	<b>\$432</b>
Q26	Common factors of 36 and 54: 1, 2, 3, 6, 9, <b>18</b> Greatest number of boxes → take biggest common factor: <b>18</b>
Q27	East
Q28	
Q29	Apple
Q30	$48 \div 2 = 24 \text{ cm}^2$ $24 \div 3 = \mathbf{8 \text{ cm}}$

Q31	$13 + 13 + 7 + 7 = 40\text{cm}$ Length of one side of square = $40 \div 4 = 10\text{cm}$ Area of square = $10 \times 10 = 100\text{cm}^2$
Q32	Length of paper = $3 \times 4 = 12\text{cm}$ Breadth of paper = $2 \times 4 = 8\text{cm}$ Perimeter = $12 + 12 + 8 + 8 = 40\text{cm}$
Q33	$5.6 \div 2 = 2.8$ $2.8 \times 9 = 25.2\text{m}$
Q34	$6L \div 4 = 1.5L$
Q35	$1.81 - 0.35 = 1.46$ $1.46 + 0.29 = 1.75\text{m}$
Q36	15 min after 1.25pm -> 1.50pm -> 13 50
Q37	Extra page = $667 - 1 = 666$ $666 \div 2 = 333$
Q38	$\frac{1}{7} + \frac{3}{4} = \frac{4}{28} + \frac{21}{28} = \frac{25}{28}$ Mark ate = $\frac{28}{28} - \frac{25}{28} = \frac{3}{28}$
Q39a	Mar
Q39b	May + Jun = $600 + 475 = 1075$ $1500 - 1075 = 425$
Q40	Length of one side of square = $5\text{cm}$ Perimeter = $10 \times 5 = 50\text{cm}$
Q41a	$4u = 216$ $1u = 54$ $5u = 5 \times 54 = 270$
Q41b	$54 - 19 = 35$
Q42a	$7u = 49$ $1u = 7$ $7 + 7 = 14$
Q42b	$9u = 9 \times 7 = 63$ $63 \times 2 = 126$
Q43	$3u = 45 + 45 = 90$ $1u = 30$ $5u = 5 \times 30 = 150$
Q44	$450 - 100 = 350$ $4u = 350$ $1u = 350 \div 4 = \$87.50$